

Comparing Numbers to 20

1. Circle the number that is worth the least.


13

eighteen


eight

17

2. Use **more than**, **less than** or **equal to**, to complete the sentence.



is _____



3. Circle the statement that is incorrect.

13 > 20


10 = ten

20 > 14

11 < 15

4. How many races did Yellow Team win?

Red Team won 6 races, but Yellow Team won 5 more.



My number is more than 12, but less than 15.



5. What could Annie's number be?

Write all the possible answers below.

Comparing Numbers to 20 Answers

1. Circle the number that is worth the least.


13

eight


eighteen

17

2. Use **more than**, **less than** or **equal to**, to complete the sentence.



is **more than**



3. Circle the statement that is incorrect.

13 > 20

20 > 14

10 = ten

11 < 15

4. How many races did Yellow Team win?

11

Red Team won 6 races, but Yellow Team won 5 more.



My number is more than 12, but less than 15.



5. What could Annie's number be?

Write all the possible answers below.

13 or 14